

National 5 Chemistry

Relevant Past Paper Questions from
SQA Standard Grade Credit
and Intermediate 2 papers

Unit 1: Chemical Changes and Structure

March 2014



N5 Chemistry Past Paper Questions

This resource has been produced in response to the requests from practitioners who attended the National Qualifications Sciences events at Hampden Stadium in December 2013 which Education Scotland organised in partnership with the SQA.

The questions in this resource relate to the Chemical Changes and Structure Unit for National 5 Chemistry and have been taken from the 2011, 2012 and 2013 Standard Grade and Intermediate 2 Past Papers.

For Chemical Changes and Structure (Unit 1), the mandatory course key areas are as follows:

- Rates of reaction
- Atomic structure and bonding related to properties of materials
- Formulae and reaction quantities
- Acids and bases

In cases where the questions relate to more than one of the National 5 Units, the constituent parts of the question have been separated into their respective key areas. The stem of the question has been retained to give the context of the question. If practitioners require the full integrated question, they should refer to the original past paper on the [SQA website](#).

Past paper questions for the other two National 5 Units, Nature's Chemistry and Chemistry in Society, are also available from Education Scotland's National Qualifications Glow portal: <http://www.educationscotland.gov.uk/nqcoursematerials/> (cut and paste link into your browser).

Education Scotland would like to acknowledge the support of the SQA in helping us produce this resource. We hope it proves helpful to practitioners across Scotland and assists with the implementation of the national qualifications.

Rates of reaction

Chemical changes and structure

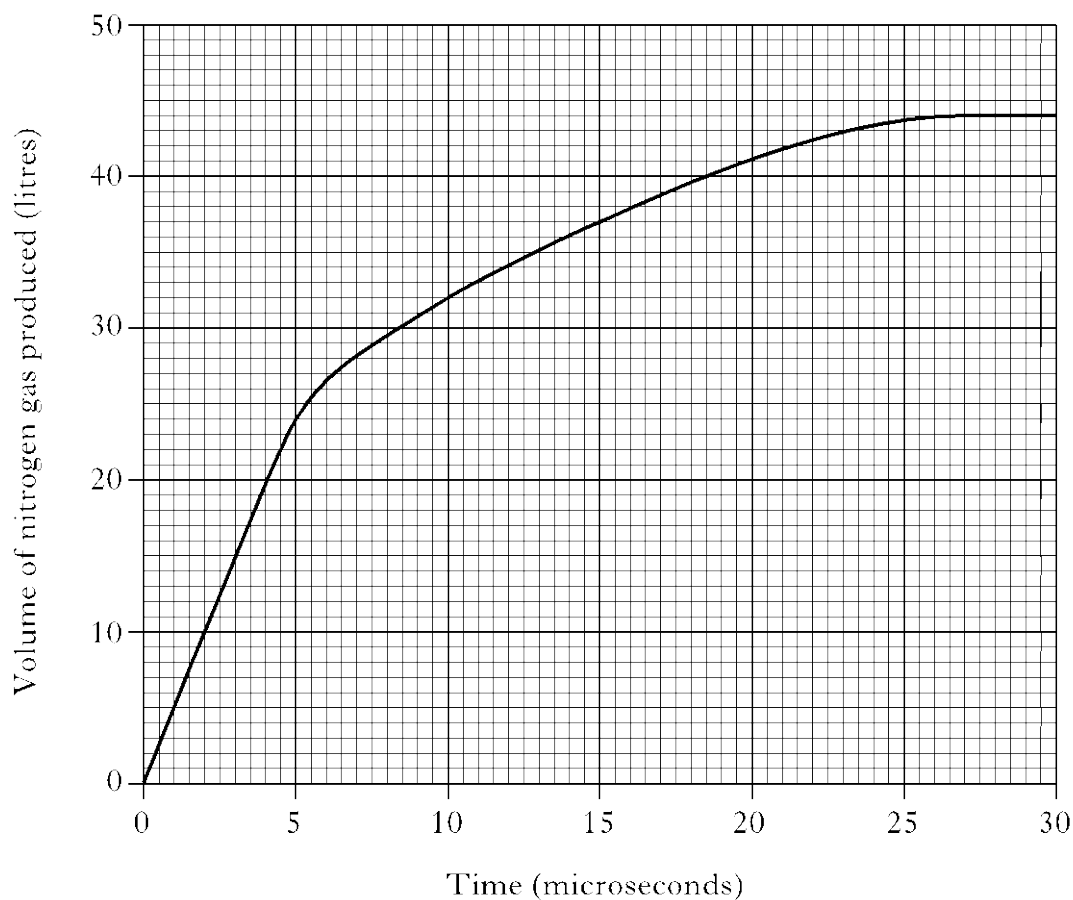
Rates of reaction

Int 2
2012
2

Marks

Rapid inflation of airbags in cars is caused by the production of nitrogen gas.

The graph gives information on the volume of gas produced over 30 microseconds.



- (a) (i) Calculate the average rate of reaction between 2 and 10 microseconds.

1

_____ litres per microsecond

Answer $\frac{32 - 10}{8}$

= 2.75 (2.8, 3 must have working)

or 2.75 on its own

Chemical changes and structure

Rates of reaction

Egg shells are made up mainly of calcium carbonate. A pupil carried out an experiment to react egg shells with dilute hydrochloric acid. A gas was produced. The volume of gas produced during the reaction was measured.

Time (min)	Volume of gas (cm ³)
0	0
2	47
4	92
6	114
8	118
10	118


Plot these results as a line graph.

Int 2
2012
11

Marks

(c)

3



Answer

Correct labels and units 1
Scale on X and Y axis 1
Correct plotting and joining of points 1

-1 if not at least half the graph paper
-1 if line not through origin

Max of 2 marks if bar or spike graph (labels, units and scale) or if both scales taken from the table

Allow $\frac{1}{2}$ box tolerance on plotting points
Allow one plotting error

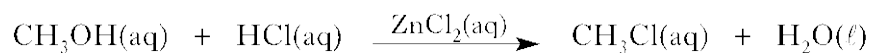
Axes can be reversed
0,0 doesn't need to be marked on scale but line must go through origin

Chemical changes and structure
Rates of reaction

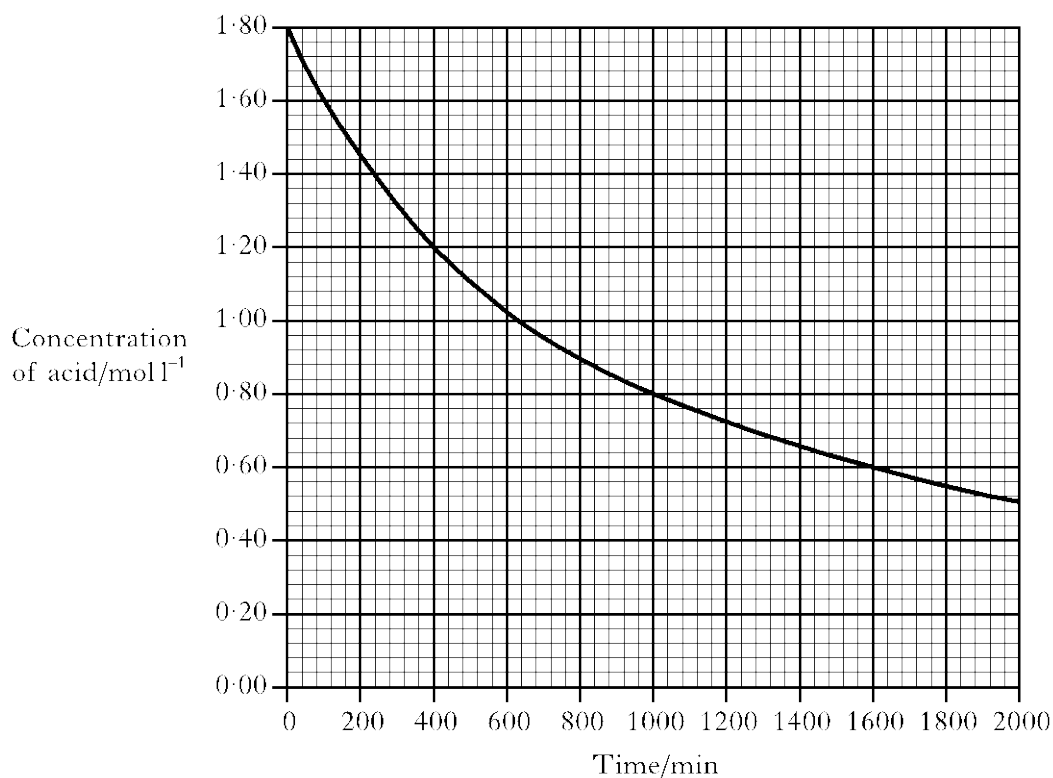
Higher
2011
1

Marks

Chloromethane, CH_3Cl , can be produced by reacting methanol solution with dilute hydrochloric acid using a solution of zinc chloride as a catalyst.



- (b) (i) The graph shows how the concentration of the hydrochloric acid changed over a period of time when the reaction was carried out at 20°C . 1



Calculate the average rate, in $\text{mol l}^{-1} \text{min}^{-1}$, in the first 400 minutes.

Answer (b) (i) Answer 0.0015

1

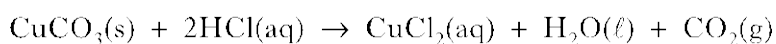
Units not required. (Incorrect units -1/2)

Chemical changes and structure
Rates of reaction

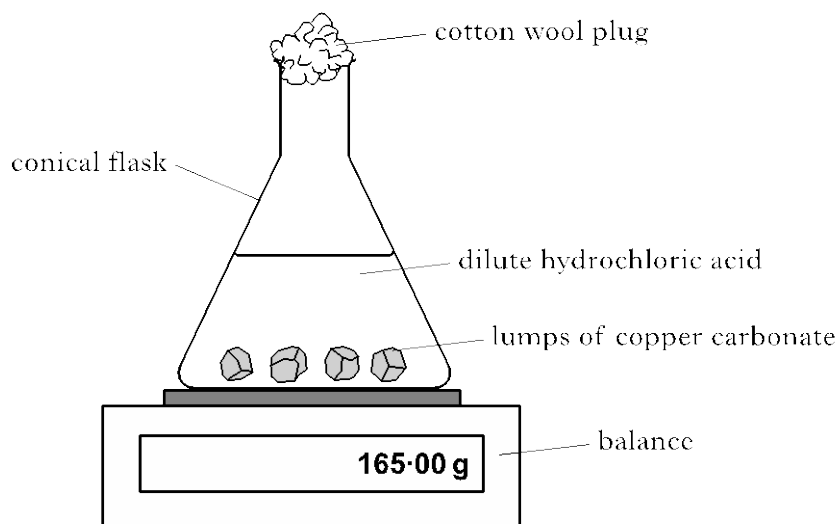
Higher
2012
2

Marks

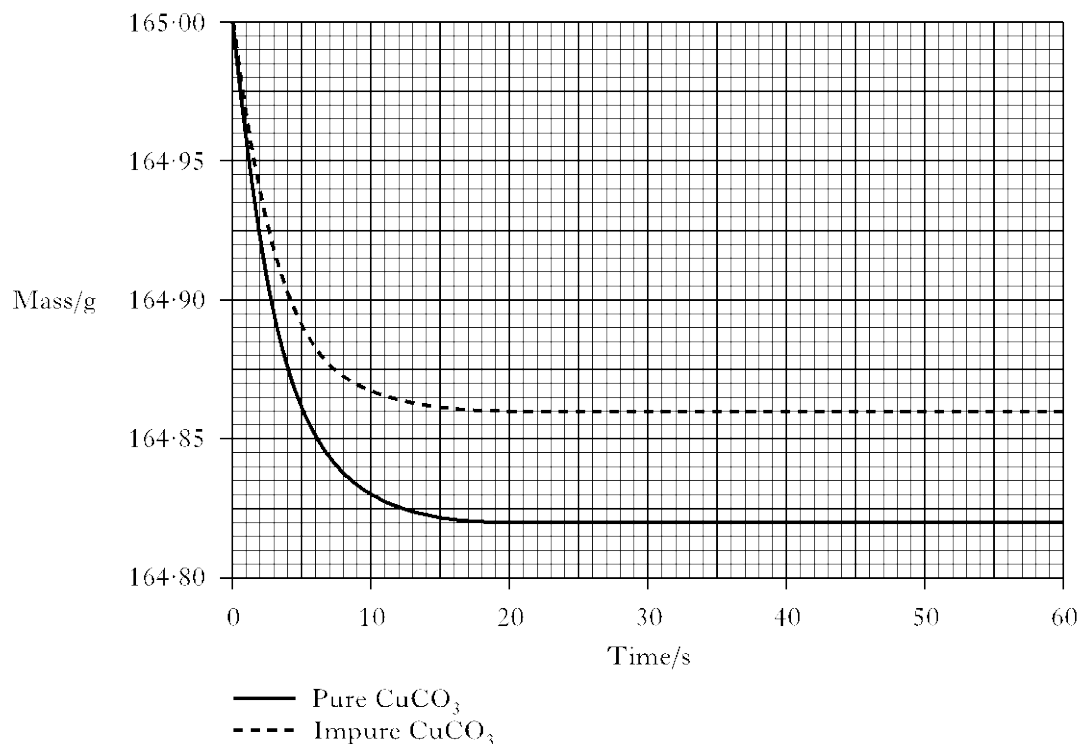
Copper (II) carbonate reacts with dilute hydrochloric acid as shown.



A student used the apparatus shown below to follow the progress of the reaction.



- (b) The experiment was carried out using 0.50 g samples of both pure and impure copper (II) carbonate. The graph below shows the results obtained.



- (i) For the sample of pure copper(II) carbonate, calculate the average reaction rate, in g s^{-1} , over the first 10 seconds.

1

Answers

(i)

0.017

Units not required

Deduct $\frac{1}{2}$ mark for incorrect units

1 mark

Atomic structure and bonding related to properties of materials

Chemical changes and structure

Atomic structure and bonding related to properties of materials

Marks

The properties of a substance depend on its type of bonding and structure.

There are four types of bonding and structure.

Discrete covalent molecular	Covalent network	Ionic lattice	Metallic lattice
------------------------------------	-------------------------	----------------------	-------------------------

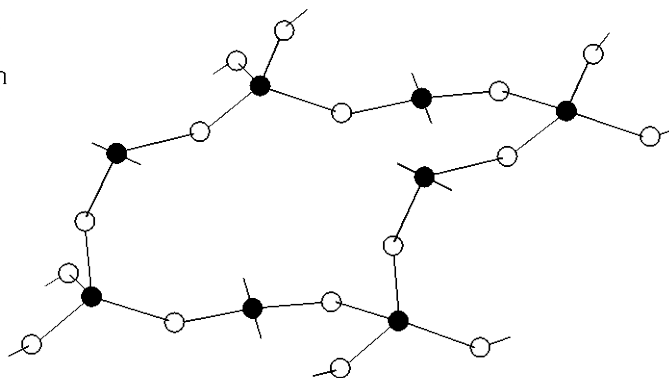
(a) Complete the table to match up each type of bonding and structure with its properties. 4

Bonding and structure type	Properties
	do not conduct electricity and have high melting points
	have high melting points and conduct electricity when liquid but not when solid
	conduct electricity when solid and have a wide range of melting points
	do not conduct electricity and have low melting points

(b) A section of a covalent network compound is shown below. 1

● = silicon

○ = oxygen



Write the formula for this covalent network compound.

Answers

(a)

1st – covalent network (accept covalent lattice)

2nd – ionic lattice

3rd – metallic lattice

4th – discrete covalent/covalent molecular

1 mark each

Accept abbreviations if obvious

(b)

SiO₂

O₂Si

Simplest Ratio

Chemical changes and structure

Atomic structure and bonding related to properties of materials

Int 2
2011
2

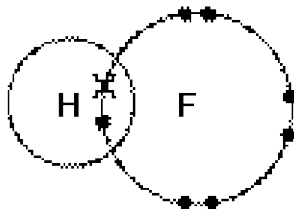
Marks

Information on some two-element molecules is shown in the table.

Name	Formula	Shape of molecule
hydrogen fluoride	HF	
water	H ₂ O	
ammonia	NH ₃	

(a) Complete the table to show the shape of a molecule of ammonia. 1

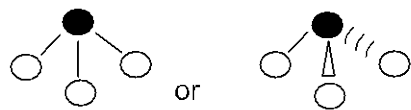
(b) The hydrogen fluoride molecule can be represented as: 1



Showing all outer electrons, draw a similar diagram to represent a molecule of water, H₂O.

Answers

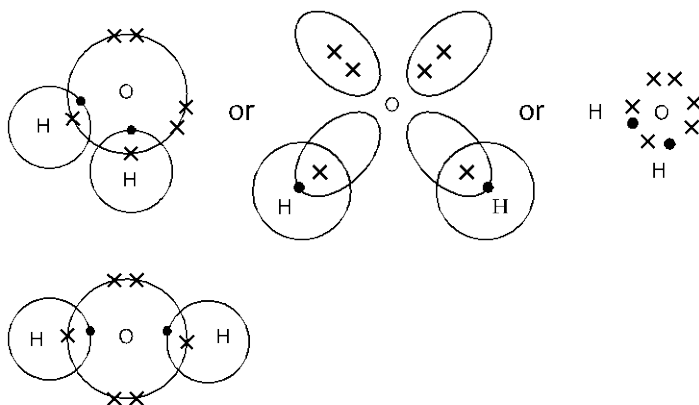
(a)



Use professional judgement to establish pyramidal shape

Accept symbols, colours other way around

(b)



At least one of the symbols must be shown

Mixture of dots and crosses are acceptable

All dots or crosses acceptable

Accept Lewis dot diagram

Ignore inner electrons on oxygen

Allow for 1 slip for misplaced electron (professional judgement)

Accept electron pair on line of touching circles

Non shared electrons do not need to be in pairs

Chemical changes and structure

Atomic structure and bonding related to properties of materials

Int 2
2011
4

Marks

Research is being carried out into making chemicals that can be used to help relieve the side effects of chemotherapy.

Part of the process is shown.



- (a) (ii) Write the formula for ruthenium (II) chloride.

1

Answer RuCl_2 $\text{Ru}^{2+}(\text{Cl})_2$ Cl_2Ru Ru_1Cl_2

If ionic formula used it must be fully correct

Chemical changes and structure

Atomic structure and bonding related to properties of materials

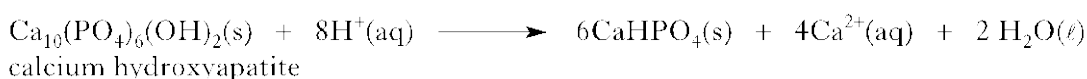
Int 2
2011
15

Marks

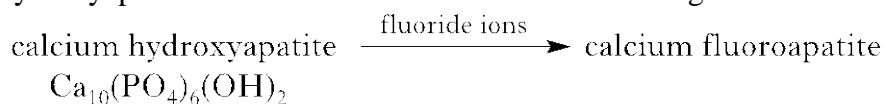
Fizzy drinks contain acids.

These acids can attack the compound calcium hydroxyapatite which is found in tooth enamel.

The equation for the reaction is:



- (b) Fluoride prevents tooth decay by replacing the hydroxide ions of calcium hydroxyapatite with fluoride ions to form hard wearing calcium fluoroapatite. 1



Write the formula for calcium fluoroapatite.

Answer $\text{Ca}_{10}(\text{PO}_4)_6\text{F}_2$
F can be in brackets (F)₂
Accept any order of symbols
Ignore charges
Use professional judgment for size of numbers in formula

Chemical changes and structure
Atomic structure and bonding related to properties of materials

Int 2
2013
4

Marks

Tritium is a naturally occurring isotope of hydrogen. It can be represented as



- (a) Complete the table to show the number of particles in an atom of tritium.

1

Type of particle	Number of particles
proton	
neutron	
electron	

- (b) Hydrogen has three isotopes.

1

Isotope of hydrogen	Mass number
protium	1
deuterium	2
tritium	3

The relative atomic mass of hydrogen is 1.

Which isotope of hydrogen is the most abundant?

- Answers (a) Proton = 1
Neutron = 2
Electron = 1

All 3 for 1 mark

- (b) Protium/
Top one/
1

Chemical changes and structure

Atomic structure and bonding related to properties of materials

Int 2
2013
6

Marks

Dishwasher tablets contain many different types of chemicals.



- (c) Phosphate ions, present in some types of dishwasher tablets, react with calcium ions in water forming calcium phosphate. Write the formula for calcium phosphate. 1

Answer $\text{Ca}_3(\text{PO}_4)_2$
 $(\text{Ca}^{2+})_3(\text{PO}_4^{3-})_2$
 $(\text{Ca}^{2+})_3(\text{PO}_4)_2$
 $\text{Ca}_3(\text{PO}_4^{3-})_2$

Chemical changes and structure
Atomic structure and bonding related to properties of materials

S Gr
2013
10

Marks

The nuclide notation for an isotope of hydrogen is ${}^1_1\text{H}$.

- (a) An isotope of copper has atomic number 29 and mass number 63.
- (i) Write the nuclide notation for this isotope of copper. 1
- (ii) How many neutrons are present in this isotope of copper? 1
-

- (b) A sample of copper was found to contain equal amounts of two isotopes. One has mass number 63 and the other has mass number 65. 1

What is the relative atomic mass of this sample of copper?

Answers (a) i 63
Cu
29

(a) ii 34
(b) 64

Chemical changes and structure

Atomic structure and bonding related to properties of materials

S Gr
2013
11

Marks

The table shows information about some useful compounds.

Compound	Formula
Y	Na_3PO_4
ammonia	NH_3
ammonium nitrate	$\text{NH}_4^+\text{NO}_3^-$

(a) (i) Name compound Y.

1

Answer: Sodium phosphate

Chemical changes and structure

Atomic structure and bonding related to properties of materials

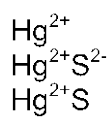
S Gr
2013
16

Marks

- (b) Metals can be extracted from their ores by different methods.
Mercury can be extracted from the ore cinnabar, HgS.
(ii) Write the formula for the mercury ion in cinnabar.

1

Answer



Ignore state symbols

Chemical changes and structure

Atomic structure and bonding related to properties of materials

S Gr
2013
17

Marks

Nitrogen trifluoride, NF_3 , is used in the manufacture of plasma screens.

- (a) Draw a diagram showing all outer electrons to represent a molecule of nitrogen trifluoride. 1
- (b) The atoms in nitrogen trifluoride are held together by covalent bonds. 1

Circle the correct words to complete the sentence.

A covalent bond forms when two $\left\{ \begin{array}{l} \text{positive} \\ \text{negative} \\ \text{neutral} \end{array} \right\}$ nuclei are held together
by their common attraction for a shared pair of $\left\{ \begin{array}{l} \text{protons} \\ \text{neutrons} \\ \text{electrons} \end{array} \right\}$.

Answer (a) Any suitable diagram showing symbols N,F and **all outer electrons** not just the shared pairs

Cross dot (with or without circles) or similar type of diagram, lobes or petals

2 non-bonding electrons need to be shown on N, but not in an overlap area

Non-bonding electrons needn't be in pairs

N and F symbols can be missed

(b)

positive

electrons

Chemical changes and structure

Atomic structure and bonding related to properties of materials

S Gr
2012
13


Marks

Hydrogen gas is made up of diatomic molecules.

- (a) Draw a diagram to show how the electrons are arranged in a molecule of hydrogen, H_2 . 1

Answer

Any suitable diagram showing two hydrogen atoms with two electrons in the overlapped area




Chemical changes and structure

Atomic structure and bonding related to properties of materials

S Gr
2012
15

Marks

Potassium hydroxide reacts with sulphuric acid to form potassium sulphate, which can be used as a fertiliser.



- (d) Ammonium phosphate is also used as a fertiliser. Write the ionic formula for ammonium phosphate. 1

Answer $(\text{NH}_4^+)_3\text{PO}_4^{3-}$

Chemical changes and structure

Atomic structure and bonding related to properties of materials

S Gr
2012
18

Marks

A student investigated how the concentration of sodium chloride in water affected the freezing point.

- (a) What type of bond is broken in sodium chloride when it dissolves in water? 1

- b) The table shows information about the freezing point of different sodium chloride solutions. 1

Concentration of sodium chloride solution (mol/l)	0	0.09	0.18	0.27	0.37	0.46
Freezing point (°C)	0	-0.2	-0.5	-0.8	-1.1	-1.5

Describe the relationship between the concentration and freezing point.

- (c) Predict the freezing point of a 0.55 mol/l sodium chloride solution. 1

_____ °C

Answer (a) Ionic
Ionic lattice
Ionic network

- (b) As concentration increases/decreases freezing point decreases/increases

The freezing point decreases/increases as concentration increases/decreases

As concentration increases freezing point gets colder

- (c) -1.8 to -2.0 inclusive

Chemical changes and structure
Atomic structure and bonding related to properties of materials

S Gr
2011
12

Marks

Ethanol, for alcoholic drinks, can be made from glucose.

- (b) The table below shows the relationship between the percentage of ethanol and the density of alcoholic drinks.

Percentage of ethanol (%)	40	50	60	70	80
Density of alcoholic drink (g/cm³)	0.928	0.907	0.886	0.865	0.844

- (i) Write a general statement describing how the percentage of ethanol affects the density of the alcoholic drink. 1
- (ii) The density of a particular brand of alcoholic drink is 0.970g/cm³. Predict the percentage of ethanol in this alcoholic drink. 1

_____ %

Answer (b) i As the percentage increases...the density decreases
As the percentage decreases...the density increases
Density increases as percentage decreases
Density decreases as percentage increases
etc

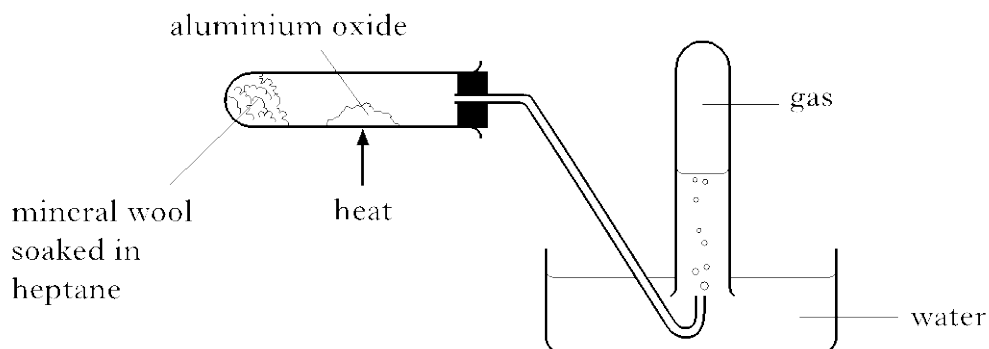
(b) ii 20

Chemical changes and structure
Atomic structure and bonding related to properties of materials


S Gr
2011
16

Marks

Heptane can be cracked as shown.



One of the reactions which takes place is:

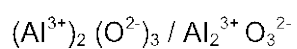


- (b) Aluminium oxide is used as a catalyst to speed up the reaction.
(ii) Write the formula for aluminium oxide.

1

Answer Al_2O_3

If ion charges are shown all must be correct



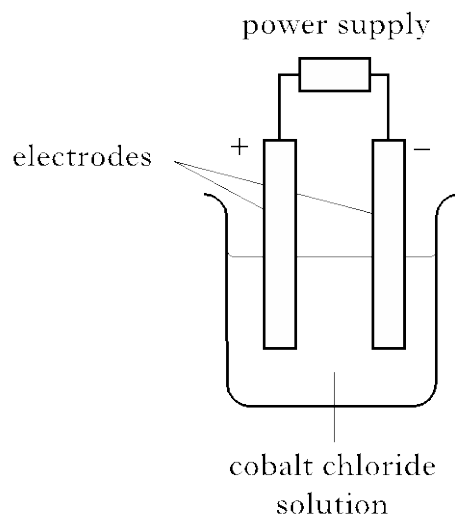
Chemical changes and structure

Atomic structure and bonding related to properties of materials

S Gr
2011
18

Marks

A student set up the following experiment to electrolyse cobalt chloride solution.



(c) The formula for cobalt chloride is CoCl_2 .

1

What is the charge on the cobalt ion in CoCl_2 ?

Answer Two positive, 2+, Co^{2+}

Formulae and reaction quantities

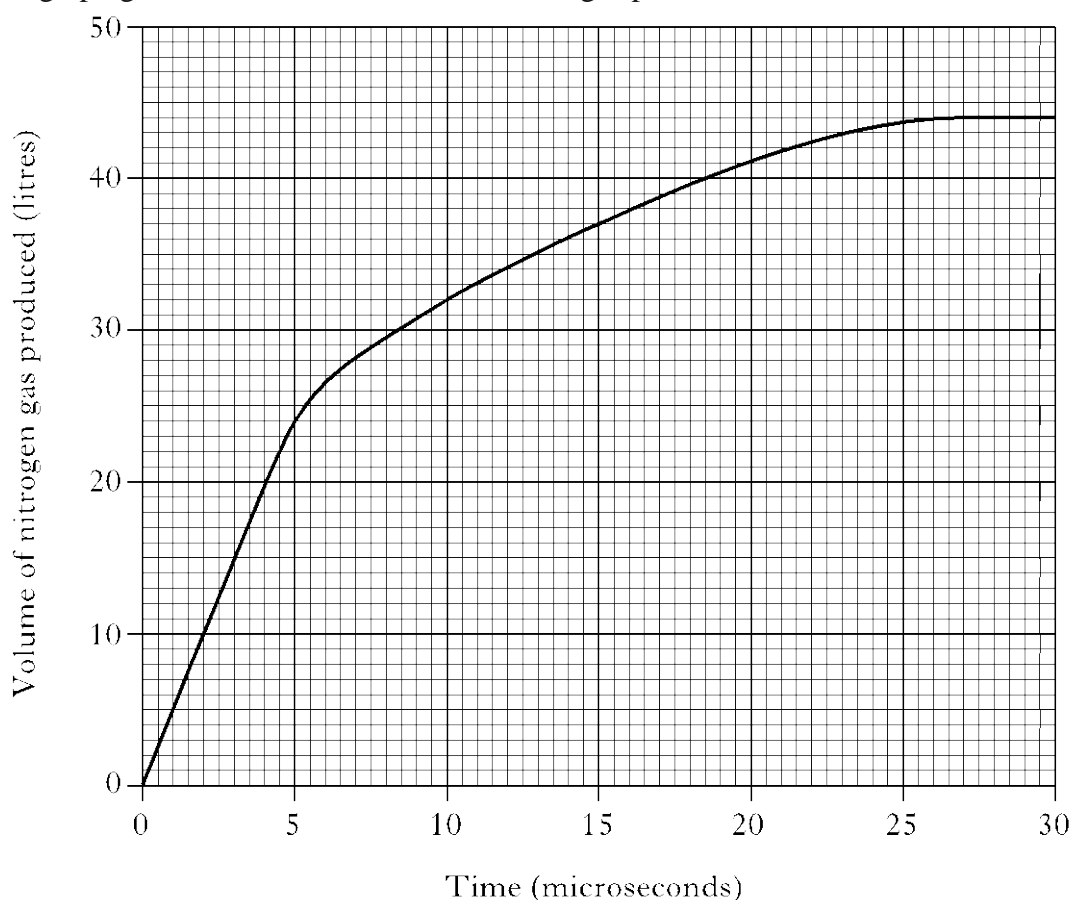
Chemical changes and structure
Formulae and reaction quantities

Int 2
2012
2

Marks

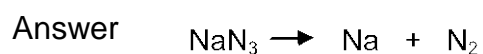
Rapid inflation of airbags in cars is caused by the production of nitrogen gas.

The graph gives information on the volume of gas produced over 30 microseconds.



- (b) In some types of airbag, electrical energy causes sodium azide, NaN_3 , to decompose producing sodium metal and nitrogen gas. 1

Write a formula equation for this reaction.



Ignore state symbols and attempts
to balance.

Allow electricity over the arrow.

Chemical changes and structure
Formulae and reaction quantities

Marks

Rust, iron (III) oxide, that forms on cars can be treated using rust remover which contains phosphoric acid.



When painted on, rust remover changes iron (III) oxide into iron (III) phosphate.



- (a) The rust remover contains 250 cm³ of 2 mol l⁻¹ phosphoric acid.
- (i) Calculate the number of moles of phosphoric acid in the rust remover. 2
- _____ mol
- (ii) Using your answer in part (i), calculate the mass of iron (III) oxide that will be removed by 250 cm³ of 2 mol l⁻¹ phosphoric acid. 2
- _____ grams

Answer	(i)	2 x 0.25	1
		= 0.5	1
		0.5 no working	2
	(ii)	GFM Fe ₂ O ₃ = 160	1
		Moles of Fe ₂ O ₃ = 0.5/2 = 0.25	
		Or mole ratio stated	1
		Fe ₂ O ₃ : H ₃ PO ₄	
		1 : 2	
		Mass of Fe ₂ O ₃ = 0.25 x 160	1
		= 40	1
		Or 40 on its own	(4)

Allow follow through using number of moles from part (i) if show working
If atomic number used instead of mass- max 2 marks

If use ratio 1:1 80g 3 marks if show working

Chemical changes and structure
Formulae and reaction quantities

Marks

Hydrogen peroxide is a useful bleaching agent and is contained in many hair dyes.
Over time, the hair dye becomes less effective as the hydrogen peroxide decomposes forming water and oxygen.

The equation for the decomposition of hydrogen peroxide is:



- (a) Balance this equation. 1
(d) When 34g of hydrogen peroxide decomposes, 12 litres of oxygen is produced. 1

Calculate the volume of oxygen produced when 1.7g of hydrogen peroxide decomposes.

_____ litres

Answer (a) $2\text{H}_2\text{O}_2(\text{aq}) \rightarrow \text{O}_2(\text{g}) + 2\text{H}_2\text{O}(\ell)$

or any multiple
ignore state symbols in transcription

(d)

$$\begin{array}{l} 34 \text{ g} \rightarrow 12 \text{ l} \\ 1.7 \text{ g} \rightarrow 1.7/34 \times 12 \end{array} \quad \begin{array}{l} \\ 1 \text{ mark} \end{array}$$

$$= 0.6 \quad 1 \text{ mark}$$

0.6 on its own – 2 marks

OR

$$\begin{array}{l} \text{No moles} = 1.7/34 = 0.05 \\ \text{Vol} = 0.05 \times 12 \end{array} \quad \begin{array}{l} \\ 1 \text{ mark} \\ 1 \text{ mark} \end{array}$$

OR

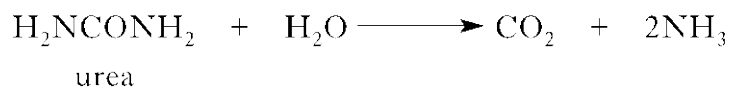
$$\begin{array}{l} 34/1.7 = 20, \text{ then } 12/20 \\ = 0.6 \end{array} \quad \begin{array}{l} \\ 1 \text{ mark} \\ 1 \text{ mark} \end{array}$$

Chemical changes and structure
Formulae and reaction quantities

Marks

S Gr
2011
17

Urea reacts with water, breaking down to form carbon dioxide and ammonia.



(b) Calculate the mass of ammonia produced, in grams, when 90 g of urea breaks down. 2

_____ grams

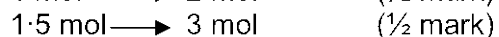
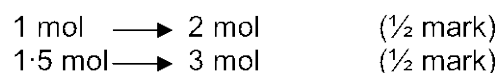
Answers

1 mol		2 mol (½ mark)
60		34 (½ mark)
90	$\frac{90 \times 34}{60} =$	51 (1 mark)

51 on its own = 2 marks

.....

$$\frac{90}{60} = 1.5 \text{ mol} \quad (\frac{1}{2} \text{ mark})$$



$$\text{Mass} = 3 \times 17 = 51 \quad (\frac{1}{2} \text{ mark})$$

Use of atomic numbers max 1 mark – Must have working

Deduct (½) mark for arithmetic error

Also accept 50.4, 50.9, 51.3 on its own = 2 marks

Chemical changes and structure
Formulae and reaction quantities

S Gr
2011
20

Marks

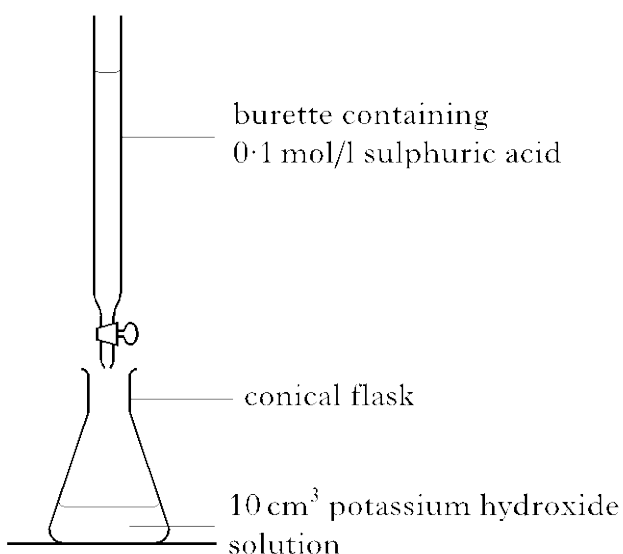
Metal salts can be produced by different methods.

- (a) Lead (II) iodide can be produced by reacting lead(II) nitrate solution with sodium iodide solution.

The equation for this reaction is:



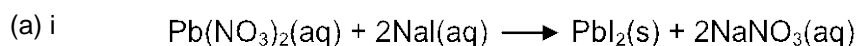
- (i) Balance the above equation. 1
- (c) Potassium sulphate can be produced by titrating potassium hydroxide solution with dilute sulphuric acid.



- (ii) The average volume of sulphuric acid used in the titration is 20 cm³. 1
- Calculate the number of moles of sulphuric acid used.

_____ mol

Answers



Or correct multiples

Moles $n = c \times v$ (½ mark)

$= 0.1 \times 0.02$ moles (if 20 used max ½ mark)

$= 0.002$ moles (½ mark)

0.002 on its own 1 mark

Chemical changes and structure
Formulae and reaction quantities

S Gr
2012
17

Marks

- (b) A solution of 0.1 mol/l hydrochloric acid has a pH of 1.
Calculate the number of moles of hydrochloric acid in 50cm³ of
0.1 mol/l hydrochloric acid solution.

1

Answer $n = c \times v$

$$n = 0.1 \times 0.05 \quad (1 \text{ mark})$$

$$n = 0.005 \text{ moles} \quad (1 \text{ mark})$$

0.005 on its own 1 mark

Deduct 1 if 50 cm³ is not in litres

Chemical changes and structure
Formulae and reaction quantities

S Gr
2012
21

Marks

Aluminium is extracted from the ore bauxite.

(c) The composition of a 250 g magnet is shown.

Metal	aluminium	nickel	cobalt	copper	titanium	iron
% by mass	10	25	20	4	1	40

(i) Calculate the mass, in grams, of aluminium in the magnet. 1
Show your working clearly.

_____ g

(ii) Using your answer to (c)(i), calculate the number of moles of aluminium in the magnet. 2

Show your working clearly.

_____ mol

Answer (i) 25g
(ii)

(allow follow through from (c)(i))

(25/27 =) 1 mark 0.926/0.93 1 mark

0.926, 0.93 or 0.9 on its own (1 mark)

If atomic numbers used (1.9) maximum 1 mark

Chemical changes and structure
Formulae and reaction quantities

S Gr
2013
17

Marks

(c)

Nitrogen trifluoride, NF₃, is used in the manufacture of plasma screens.
The equation for the formation of nitrogen trifluoride, NF₃, is:

2



Calculate the mass of nitrogen trifluoride produced from 7 g of nitrogen.

Show your working clearly.

_____ g

Answers (c)

$$1 \text{ mole N}_2 = 28 \text{ g}$$

$$7/28 = 0.25 \text{ moles } (1/2)$$

$$0.25 \text{ to } 0.5 \text{ (1 mole to 2 moles) } (1/2)$$

$$1 \text{ mole NF}_3 = 71 \text{ g } (1/2 \text{ for both formula masses})$$

$$71 \times 0.5 = \underline{35.5} \text{ } (1/2)$$

35.5 on its own 2 marks

$$1 : 2 \text{ } (1/2)$$

$$28 : 142 \text{ } (1/2)$$

$$1 \longrightarrow 142/28 \text{ } (1/2)$$

$$7 \longrightarrow 142 \times 7/28 = \underline{35.5} \text{ } (1/2)$$

or any other acceptable method

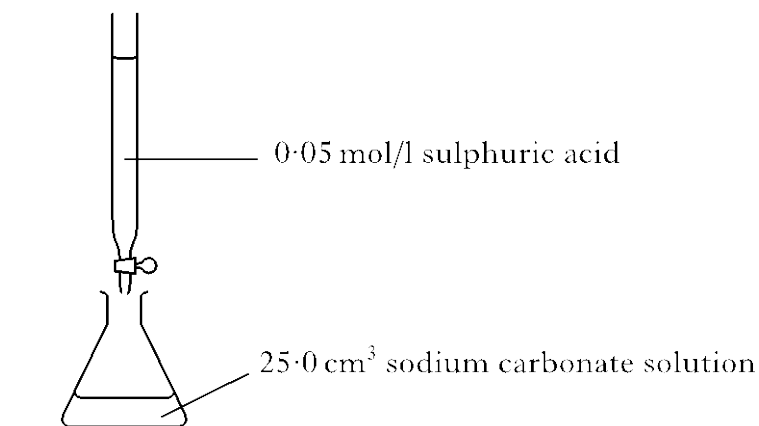
Chemical changes and structure
Formulae and reaction quantities

S Gr
2013
18

Marks

A student investigated the reaction between dilute sulphuric acid and sodium carbonate.

- (b) Another experiment involved determining the concentration of sodium carbonate solution by titration.



The results showed that 20cm³ of sulphuric acid was required to neutralise the sodium carbonate solution.

- (i) Calculate the number of moles of sulphuric acid in this volume.

1

_____ mol

Answer

$$\begin{aligned} (n &= c \times V) \\ n &= 0.05 \times 0.02 && (1) \\ n &= 0.001 (1) \end{aligned}$$

If 20 cm³ used in place of 0.02 (-1)
Using wrong substance i.e. 0.025 (-1)

Acids and bases

Chemical changes and structure

Acids and bases

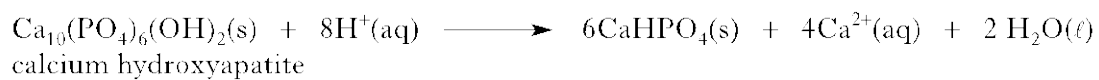
Int 2
2011
15

Marks

Fizzy drinks contain acids.

These acids can attack the compound calcium hydroxyapatite which is found in tooth enamel.

The equation for the reaction is:



- (a) What will happen to the pH as the tooth enamel is attacked by the acids? 1

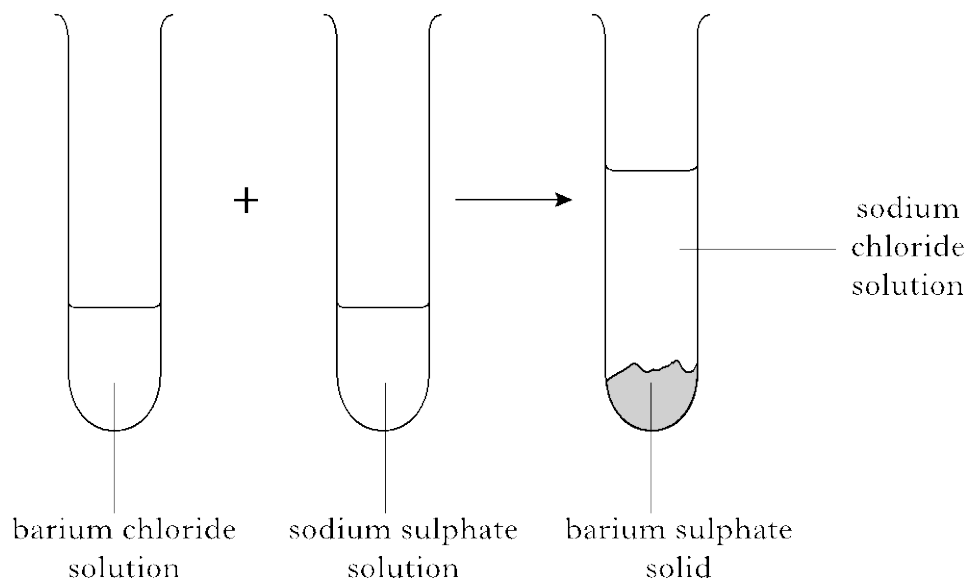
Answers (a) (pH) will rise towards 7/
(pH) will rise/
(pH) becomes less acidic/
increases/
becomes neutral

Chemical changes and structure
Acids and bases

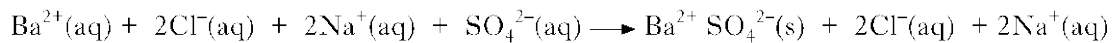
Int 2
2012
13

Marks

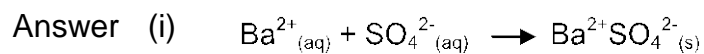
A student carried out the following experiment.



(b) The equation for the reaction is



- (i) Rewrite the equation showing only the ions which react. 1
- (ii) What term is used to describe the ions which do not react? 1



State symbols not required

- (ii) Spectator (ions)/spectate

Chemical changes and structure
Acids and bases

S Gr
2011
14

Marks

(a) When sulphur dioxide dissolves in water in the atmosphere “acid rain” is produced.

Circle the correct phrase to complete the sentence.

1

Compared with pure water, acid rain contains $\left\{ \begin{array}{l} \text{a higher} \\ \text{a lower} \\ \text{the same} \end{array} \right\}$ concentration of hydrogen ions.

Answer: a higher

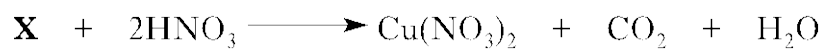
Chemical changes and structure
Acids and bases

S Gr
2011
20

Marks

Metal salts can be produced by different methods.

(b) The salt copper (II) nitrate can be produced as shown.



1

Name substance X.

Answer

Copper carbonate CuCO_3

Chemical changes and structure
Acids and bases

S Gr
2012
15

Marks

Potassium hydroxide reacts with sulphuric acid to form potassium sulphate, which can be used as a fertiliser.



- (b) Name the type of chemical reaction taking place. 1

Answer: neutralisation


Chemical changes and structure
Acids and bases

S Gr
2012
17

Marks

A solution of 0.1 mol/l hydrochloric acid has a pH of 1.

- (a) (i) What colour would universal indicator turn when added to a solution of hydrochloric acid? 1
- (ii) Starting at pH 1, draw a line to show how the pH of this acid changes when diluted with water. 1



- Answer (i) Red, pink, orange, yellow
- (ii) Line must be increasing }
Line stops at pH7 or below } or 0